

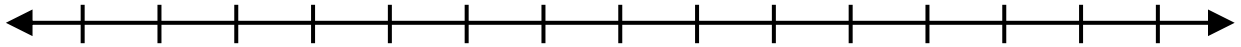
Name: _____ Date: _____ Period: _____

Use this sheet to graph the solution only. Solve the inequality on a separate sheet of paper and attach to this one. *If these directions are not followed, you will be asked to redo the assignment properly and lose 2 points.*

Problem # _____



Problem # _____



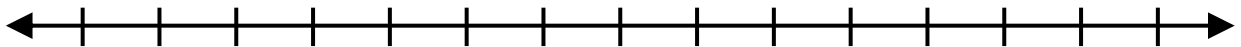
Problem # _____



Problem # _____



Problem # _____



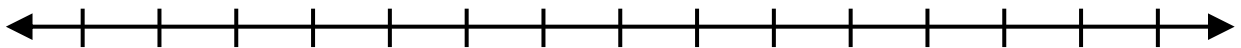
Problem # _____



Problem # _____



Problem # _____

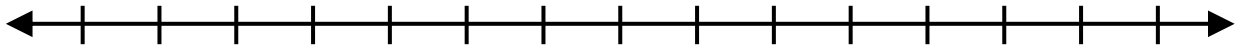


Problem # _____

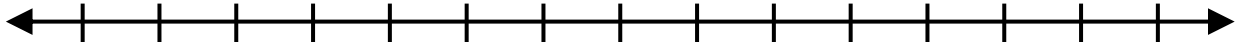


Name: _____ Date: _____ Period: _____

Problem # _____



Problem # _____



Problem # _____



Problem # _____



Problem # _____



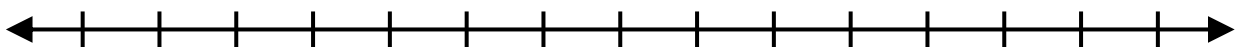
Problem # _____



Problem # _____



Problem # _____



Problem # _____

